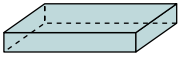




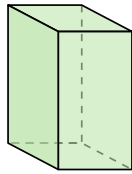
Determine which choice BEST describes the shape shown.

1)



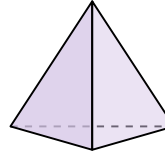
- A. Triangular Pyramid
- B. Cone
- C. Rectangular Prism
- D. Cylinder

2)




- A. Cone
- B. Rectangular Prism
- C. Triangular Pyramid
- D. Rectangular Pyramid

3)



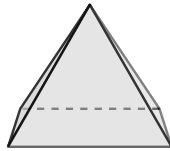
- A. Triangular Prism
- B. Cone
- C. Triangular Pyramid
- D. Sphere

4)



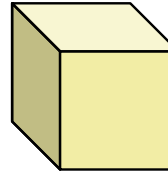
- A. Cylinder
- B. Triangular Prism
- C. Triangular Pyramid
- D. Rectangular Pyramid

5)



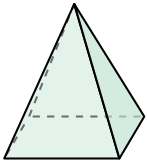
- A. Cone
- B. Rectangular Pyramid
- C. Sphere
- D. Cylinder

6)




- A. Cube
- B. Rectangular Prism
- C. Triangular Prism
- D. Cylinder

7)



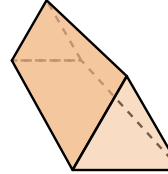
- A. Cone
- B. Rectangular Pyramid
- C. Sphere
- D. Rectangular Prism

8)



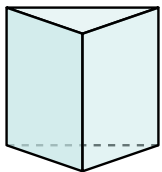
- A. Cone
- B. Rectangular Pyramid
- C. Triangular Pyramid
- D. Cube

9)



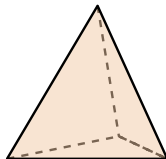
- A. Triangular Pyramid
- B. Sphere
- C. Triangular Prism
- D. Rectangular Pyramid

10)



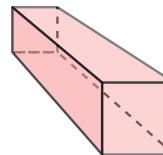
- A. Triangular Prism
- B. Sphere
- C. Cube
- D. Cone

11)



- A. Triangular Pyramid
- B. Triangular Prism
- C. Cylinder
- D. Cone

12)



- A. Triangular Prism
- B. Triangular Pyramid
- C. Rectangular Prism
- D. Cone

Answers

1. _____

2. _____

3. _____

4. _____

5. _____

6. _____

7. _____

8. _____

9. _____

10. _____

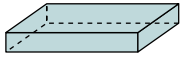
11. _____

12. _____



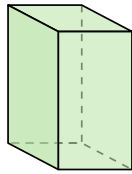
Determine which choice BEST describes the shape shown.

1)



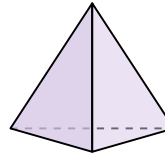
- A. Triangular Pyramid
- B. Cone
- C. Rectangular Prism
- D. Cylinder

2)




- A. Cone
- B. Rectangular Prism
- C. Triangular Pyramid
- D. Rectangular Pyramid

3)



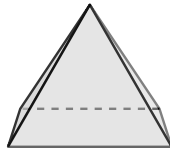
- A. Triangular Prism
- B. Cone
- C. Triangular Pyramid
- D. Sphere

4)



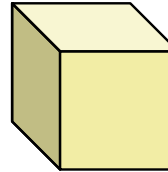
- A. Cylinder
- B. Triangular Prism
- C. Triangular Pyramid
- D. Rectangular Pyramid

5)



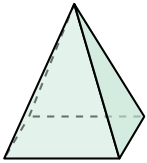
- A. Cone
- B. Rectangular Pyramid
- C. Sphere
- D. Cylinder

6)




- A. Cube
- B. Rectangular Prism
- C. Triangular Prism
- D. Cylinder

7)



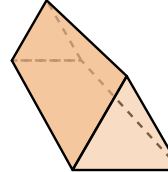
- A. Cone
- B. Rectangular Pyramid
- C. Sphere
- D. Rectangular Prism

8)



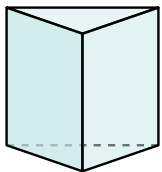
- A. Cone
- B. Rectangular Pyramid
- C. Triangular Pyramid
- D. Cube

9)



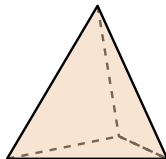
- A. Triangular Pyramid
- B. Sphere
- C. Triangular Prism
- D. Rectangular Pyramid

10)



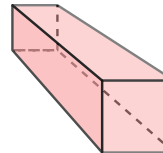
- A. Triangular Prism
- B. Sphere
- C. Cube
- D. Cone

11)



- A. Triangular Pyramid
- B. Triangular Prism
- C. Cylinder
- D. Cone

12)



- A. Triangular Prism
- B. Triangular Pyramid
- C. Rectangular Prism
- D. Cone

Answers

1. **C**

2. **B**

3. **C**

4. **A**

5. **B**

6. **A**

7. **B**

8. **A**

9. **C**

10. **A**

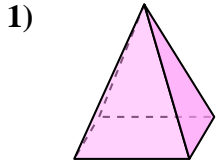
11. **A**

12. **C**

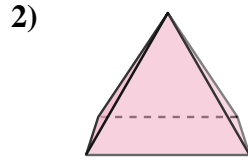


Determine which choice BEST describes the shape shown.

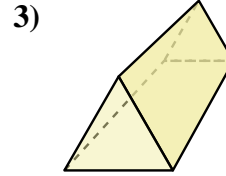
Answers



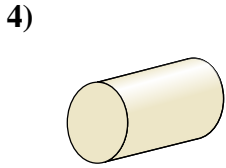
- A. Cube
- B. Sphere
- C. Rectangular Pyramid
- D. Triangular Prism



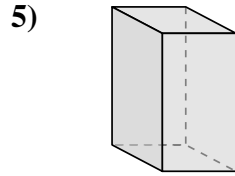
- A. Rectangular Pyramid
- B. Triangular Pyramid
- C. Rectangular Prism
- D. Cone



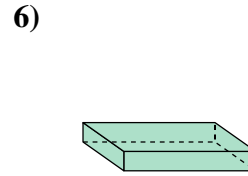
- A. Cone
- B. Cylinder
- C. Triangular Pyramid
- D. Triangular Prism



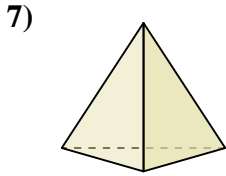
- A. Rectangular Pyramid
- B. Sphere
- C. Cylinder
- D. Triangular Pyramid



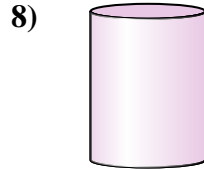
- A. Rectangular Prism
- B. Triangular Prism
- C. Rectangular Pyramid
- D. Cone



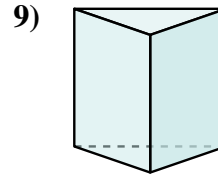
- A. Sphere
- B. Cylinder
- C. Cube
- D. Rectangular Prism



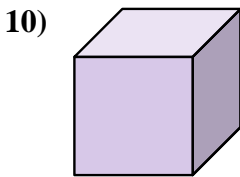
- A. Cone
- B. Rectangular Prism
- C. Triangular Pyramid
- D. Sphere



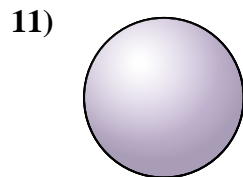
- A. Sphere
- B. Triangular Prism
- C. Cube
- D. Cylinder



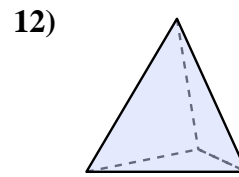
- A. Cube
- B. Triangular Prism
- C. Rectangular Prism
- D. Cylinder



- A. Triangular Prism
- B. Cube
- C. Rectangular Pyramid
- D. Sphere



- A. Cube
- B. Cylinder
- C. Triangular Pyramid
- D. Sphere

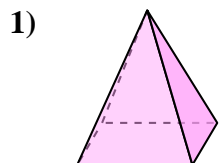


- A. Triangular Pyramid
- B. Rectangular Pyramid
- C. Cylinder
- D. Rectangular Prism

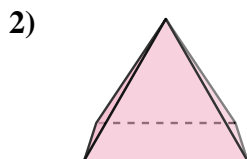
- 1. _____
- 2. _____
- 3. _____
- 4. _____
- 5. _____
- 6. _____
- 7. _____
- 8. _____
- 9. _____
- 10. _____
- 11. _____
- 12. _____



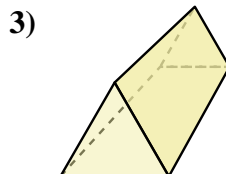
Determine which choice BEST describes the shape shown.



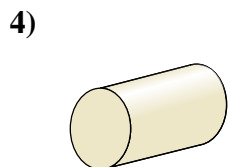
- A. Cube
- B. Sphere
- C. Rectangular Pyramid
- D. Triangular Prism



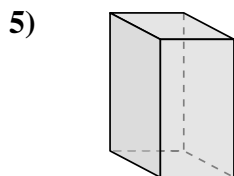
- A. Rectangular Pyramid
- B. Triangular Pyramid
- C. Rectangular Prism
- D. Cone



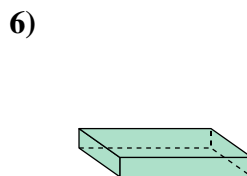
- A. Cone
- B. Cylinder
- C. Triangular Pyramid
- D. Triangular Prism



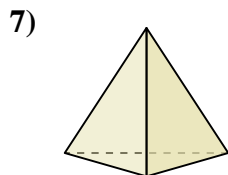
- A. Rectangular Pyramid
- B. Sphere
- C. Cylinder
- D. Triangular Pyramid



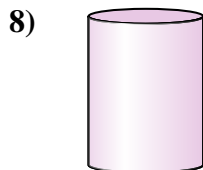
- A. Rectangular Prism
- B. Triangular Prism
- C. Rectangular Pyramid
- D. Cone



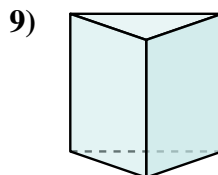
- A. Sphere
- B. Cylinder
- C. Cube
- D. Rectangular Prism



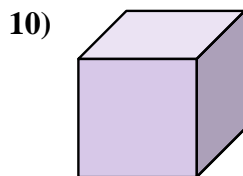
- A. Cone
- B. Rectangular Prism
- C. Triangular Pyramid
- D. Sphere



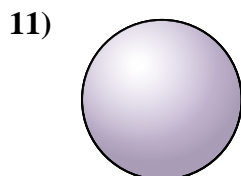
- A. Sphere
- B. Triangular Prism
- C. Cube
- D. Cylinder



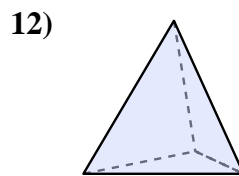
- A. Cube
- B. Triangular Prism
- C. Rectangular Prism
- D. Cylinder



- A. Triangular Prism
- B. Cube
- C. Rectangular Pyramid
- D. Sphere



- A. Cube
- B. Cylinder
- C. Triangular Pyramid
- D. Sphere



- A. Triangular Pyramid
- B. Rectangular Pyramid
- C. Cylinder
- D. Rectangular Prism

Answers

1. C

2. A

3. D

4. C

5. A

6. D

7. C

8. D

9. B

10. B

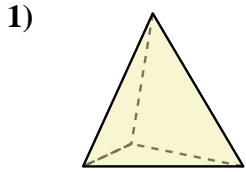
11. D

12. A

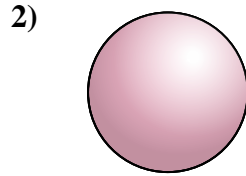


Determine which choice BEST describes the shape shown.

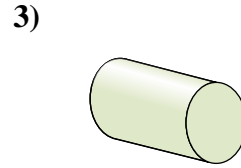
Answers



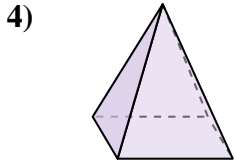
- A. Rectangular Prism
- B. Triangular Pyramid
- C. Cube
- D. Cylinder



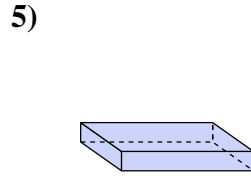
- A. Rectangular Pyramid
- B. Cube
- C. Triangular Pyramid
- D. Sphere



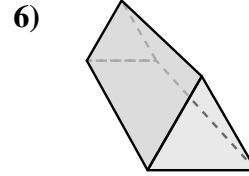
- A. Rectangular Pyramid
- B. Triangular Prism
- C. Cone
- D. Cylinder



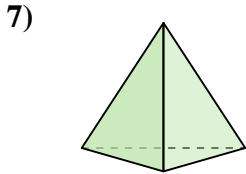
- A. Cone
- B. Rectangular Pyramid
- C. Triangular Pyramid
- D. Cube



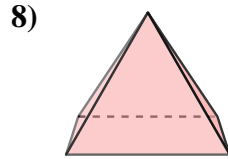
- A. Rectangular Prism
- B. Triangular Pyramid
- C. Cone
- D. Cylinder



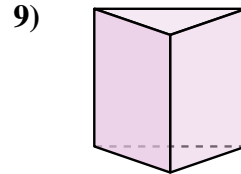
- A. Sphere
- B. Triangular Prism
- C. Triangular Pyramid
- D. Cone



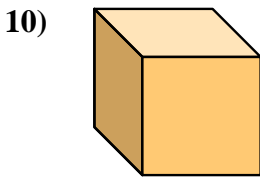
- A. Sphere
- B. Cone
- C. Triangular Pyramid
- D. Cube



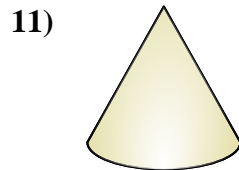
- A. Sphere
- B. Triangular Pyramid
- C. Cube
- D. Rectangular Pyramid



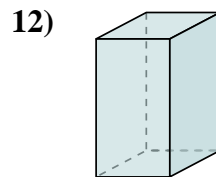
- A. Triangular Prism
- B. Cone
- C. Rectangular Prism
- D. Rectangular Pyramid



- A. Triangular Pyramid
- B. Rectangular Prism
- C. Cube
- D. Triangular Prism



- A. Rectangular Prism
- B. Cube
- C. Cone
- D. Sphere



- A. Rectangular Prism
- B. Rectangular Pyramid
- C. Triangular Pyramid
- D. Cube

1. _____

2. _____

3. _____

4. _____

5. _____

6. _____

7. _____

8. _____

9. _____

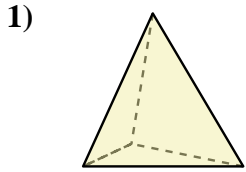
10. _____

11. _____

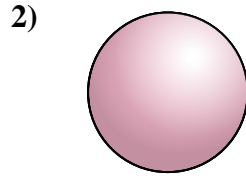
12. _____



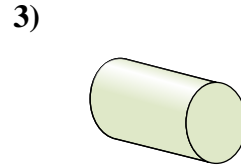
Determine which choice BEST describes the shape shown.



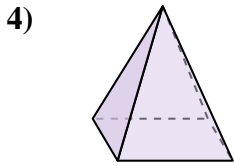
- A. Rectangular Prism
- B. Triangular Pyramid
- C. Cube
- D. Cylinder



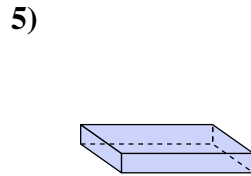
- A. Rectangular Pyramid
- B. Cube
- C. Triangular Pyramid
- D. Sphere



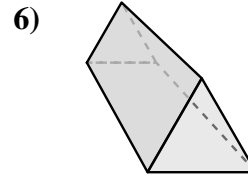
- A. Rectangular Pyramid
- B. Triangular Prism
- C. Cone
- D. Cylinder



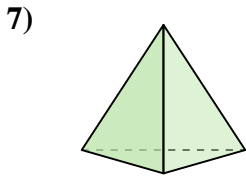
- A. Cone
- B. Rectangular Pyramid
- C. Triangular Pyramid
- D. Cube



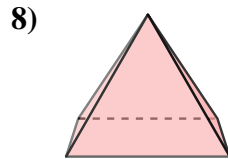
- A. Rectangular Prism
- B. Triangular Pyramid
- C. Cone
- D. Cylinder



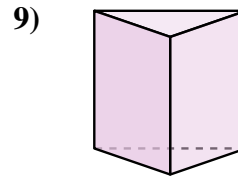
- A. Sphere
- B. Triangular Prism
- C. Triangular Pyramid
- D. Cone



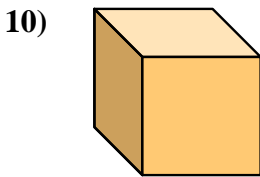
- A. Sphere
- B. Cone
- C. Triangular Pyramid
- D. Cube



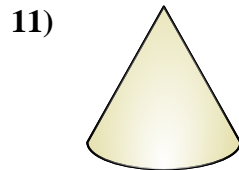
- A. Sphere
- B. Triangular Pyramid
- C. Cube
- D. Rectangular Pyramid



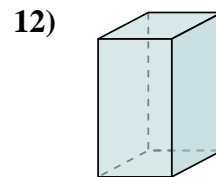
- A. Triangular Prism
- B. Cone
- C. Rectangular Prism
- D. Rectangular Pyramid



- A. Triangular Pyramid
- B. Rectangular Prism
- C. Cube
- D. Triangular Prism



- A. Rectangular Prism
- B. Cube
- C. Cone
- D. Sphere



- A. Rectangular Prism
- B. Rectangular Pyramid
- C. Triangular Pyramid
- D. Cube

Answers

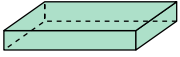
- 1. **B**
- 2. **D**
- 3. **D**
- 4. **B**
- 5. **A**
- 6. **B**
- 7. **C**
- 8. **D**
- 9. **A**
- 10. **C**
- 11. **C**
- 12. **A**



Determine which choice BEST describes the shape shown.

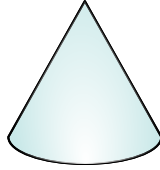
Answers

1)



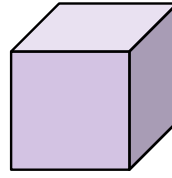
- A. Rectangular Prism
- B. Rectangular Pyramid
- C. Sphere
- D. Cube

2)



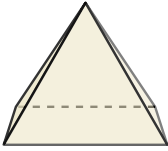
- A. Cylinder
- B. Triangular Prism
- C. Sphere
- D. Cone

3)




- A. Triangular Pyramid
- B. Rectangular Prism
- C. Cube
- D. Sphere

4)



- A. Triangular Prism
- B. Sphere
- C. Cone
- D. Rectangular Pyramid

5)



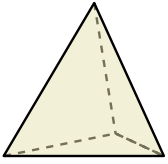
- A. Cone
- B. Sphere
- C. Rectangular Pyramid
- D. Cylinder

6)



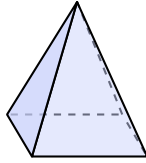
- A. Rectangular Prism
- B. Rectangular Pyramid
- C. Cube
- D. Cylinder

7)



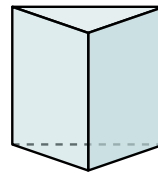
- A. Cylinder
- B. Triangular Prism
- C. Cube
- D. Triangular Pyramid

8)



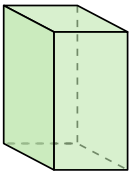
- A. Cone
- B. Cube
- C. Rectangular Pyramid
- D. Triangular Prism

9)



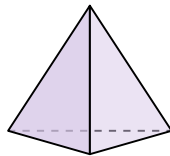
- A. Rectangular Pyramid
- B. Sphere
- C. Triangular Pyramid
- D. Triangular Prism

10)



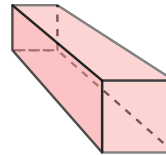
- A. Sphere
- B. Rectangular Prism
- C. Cone
- D. Triangular Prism

11)



- A. Triangular Prism
- B. Cube
- C. Triangular Pyramid
- D. Cone

12)



- A. Triangular Pyramid
- B. Triangular Prism
- C. Rectangular Prism
- D. Sphere

1. _____

2. _____

3. _____

4. _____

5. _____

6. _____

7. _____

8. _____

9. _____

10. _____

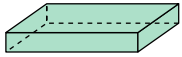
11. _____

12. _____



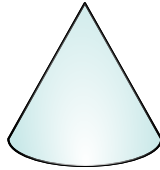
Determine which choice BEST describes the shape shown.

1)



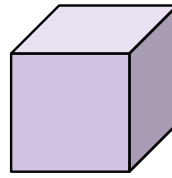
- A. Rectangular Prism
- B. Rectangular Pyramid
- C. Sphere
- D. Cube

2)



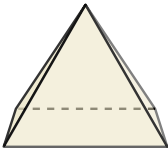
- A. Cylinder
- B. Triangular Prism
- C. Sphere
- D. Cone

3)




- A. Triangular Pyramid
- B. Rectangular Prism
- C. Cube
- D. Sphere

4)



- A. Triangular Prism
- B. Sphere
- C. Cone
- D. Rectangular Pyramid

5)



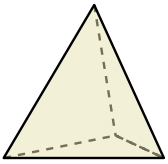
- A. Cone
- B. Sphere
- C. Rectangular Pyramid
- D. Cylinder

6)



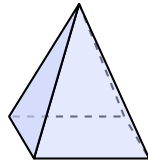
- A. Rectangular Prism
- B. Rectangular Pyramid
- C. Cube
- D. Cylinder

7)



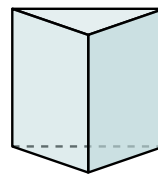
- A. Cylinder
- B. Triangular Prism
- C. Cube
- D. Triangular Pyramid

8)



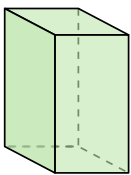
- A. Cone
- B. Cube
- C. Rectangular Pyramid
- D. Triangular Prism

9)



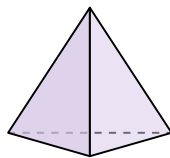
- A. Rectangular Pyramid
- B. Sphere
- C. Triangular Pyramid
- D. Triangular Prism

10)



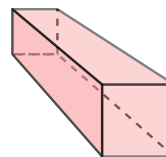
- A. Sphere
- B. Rectangular Prism
- C. Cone
- D. Triangular Prism

11)



- A. Triangular Prism
- B. Cube
- C. Triangular Pyramid
- D. Cone

12)



- A. Triangular Pyramid
- B. Triangular Prism
- C. Rectangular Prism
- D. Sphere

Answers

1. **A**

2. **D**

3. **C**

4. **D**

5. **B**

6. **D**

7. **D**

8. **C**

9. **D**

10. **B**

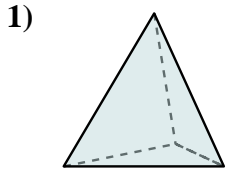
11. **C**

12. **C**

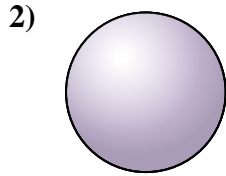


Determine which choice BEST describes the shape shown.

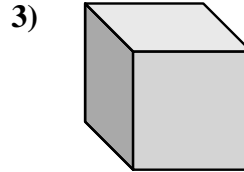
Answers



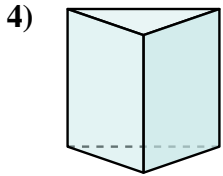
- A. Rectangular Prism
- B. Triangular Pyramid
- C. Sphere
- D. Triangular Prism



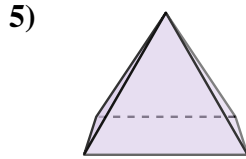
- A. Triangular Pyramid
- B. Triangular Prism
- C. Rectangular Pyramid
- D. Sphere



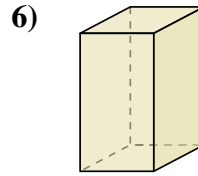
- A. Triangular Pyramid
- B. Triangular Prism
- C. Rectangular Pyramid
- D. Cube



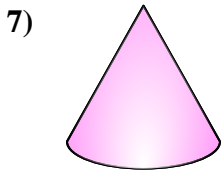
- A. Rectangular Prism
- B. Cube
- C. Triangular Prism
- D. Triangular Pyramid



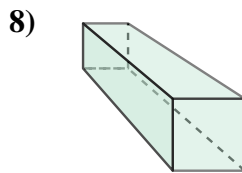
- A. Rectangular Prism
- B. Cube
- C. Cylinder
- D. Rectangular Pyramid



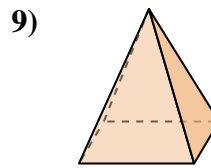
- A. Cylinder
- B. Cone
- C. Triangular Pyramid
- D. Rectangular Prism



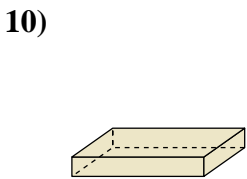
- A. Rectangular Pyramid
- B. Cylinder
- C. Cone
- D. Triangular Prism



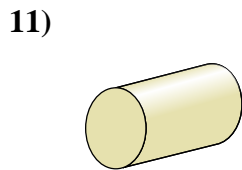
- A. Rectangular Prism
- B. Triangular Pyramid
- C. Cylinder
- D. Cube



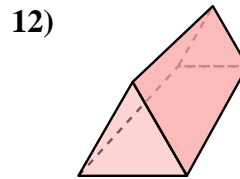
- A. Cube
- B. Rectangular Pyramid
- C. Triangular Prism
- D. Sphere



- A. Rectangular Pyramid
- B. Rectangular Prism
- C. Triangular Pyramid
- D. Cone



- A. Cylinder
- B. Rectangular Prism
- C. Triangular Prism
- D. Triangular Pyramid



- A. Triangular Pyramid
- B. Triangular Prism
- C. Cylinder
- D. Sphere

1. _____

2. _____

3. _____

4. _____

5. _____

6. _____

7. _____

8. _____

9. _____

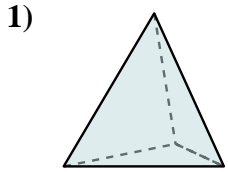
10. _____

11. _____

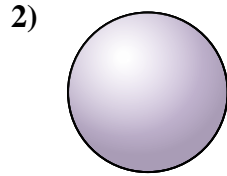
12. _____



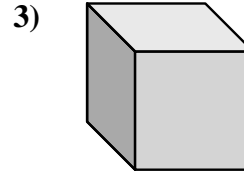
Determine which choice BEST describes the shape shown.



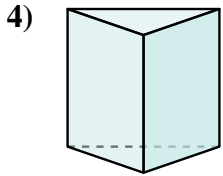
- A. Rectangular Prism
- B. Triangular Pyramid
- C. Sphere
- D. Triangular Prism



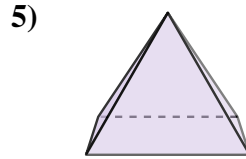
- A. Triangular Pyramid
- B. Triangular Prism
- C. Rectangular Pyramid
- D. Sphere



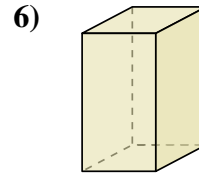
- A. Triangular Pyramid
- B. Triangular Prism
- C. Rectangular Pyramid
- D. Cube



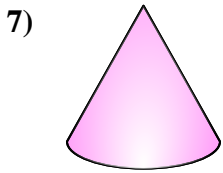
- A. Rectangular Prism
- B. Cube
- C. Triangular Prism
- D. Triangular Pyramid



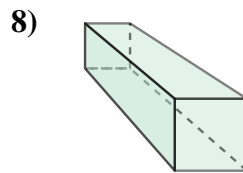
- A. Rectangular Prism
- B. Cube
- C. Cylinder
- D. Rectangular Pyramid



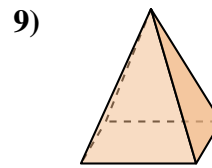
- A. Cylinder
- B. Cone
- C. Triangular Pyramid
- D. Rectangular Prism



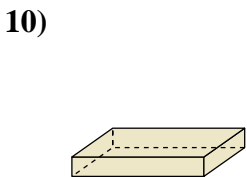
- A. Rectangular Pyramid
- B. Cylinder
- C. Cone
- D. Triangular Prism



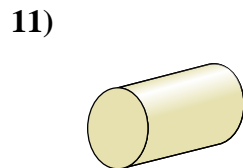
- A. Rectangular Prism
- B. Triangular Pyramid
- C. Cylinder
- D. Cube



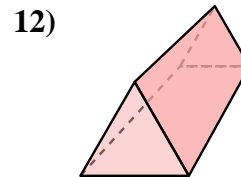
- A. Cube
- B. Rectangular Pyramid
- C. Triangular Prism
- D. Sphere



- A. Rectangular Pyramid
- B. Rectangular Prism
- C. Triangular Pyramid
- D. Cone



- A. Cylinder
- B. Rectangular Prism
- C. Triangular Prism
- D. Triangular Pyramid



- A. Triangular Pyramid
- B. Triangular Prism
- C. Cylinder
- D. Sphere

Answers

1. **B**

2. **D**

3. **D**

4. **C**

5. **D**

6. **D**

7. **C**

8. **A**

9. **B**

10. **B**

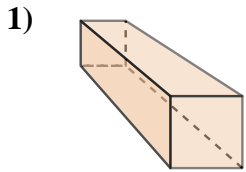
11. **A**

12. **B**

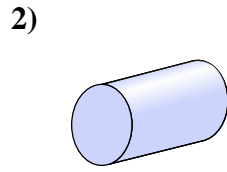


Determine which choice BEST describes the shape shown.

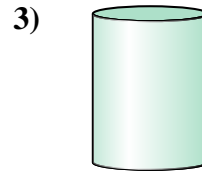
Answers



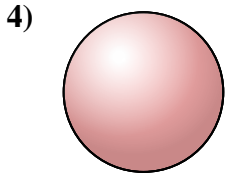
- A. Cone
- B. Rectangular Prism
- C. Rectangular Pyramid
- D. Cylinder



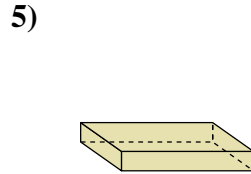
- A. Rectangular Prism
- B. Triangular Pyramid
- C. Cylinder
- D. Triangular Prism



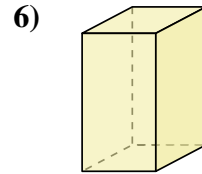
- A. Cube
- B. Cylinder
- C. Rectangular Pyramid
- D. Rectangular Prism



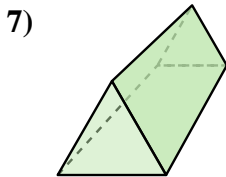
- A. Cylinder
- B. Rectangular Pyramid
- C. Triangular Prism
- D. Sphere



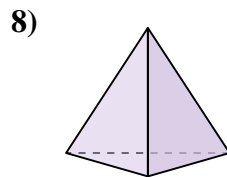
- A. Triangular Prism
- B. Triangular Pyramid
- C. Rectangular Prism
- D. Sphere



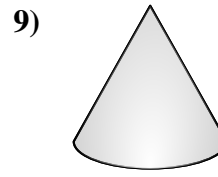
- A. Cone
- B. Triangular Prism
- C. Rectangular Prism
- D. Cylinder



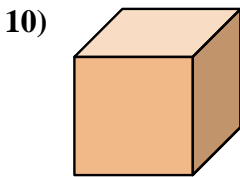
- A. Cone
- B. Sphere
- C. Cube
- D. Triangular Prism



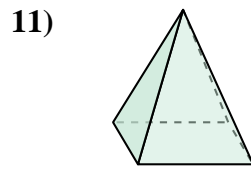
- A. Cylinder
- B. Rectangular Prism
- C. Triangular Pyramid
- D. Cone



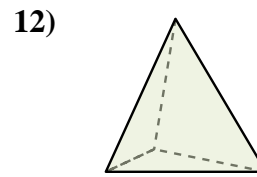
- A. Triangular Prism
- B. Rectangular Prism
- C. Cone
- D. Cube



- A. Cube
- B. Sphere
- C. Triangular Pyramid
- D. Rectangular Prism



- A. Cone
- B. Triangular Prism
- C. Rectangular Pyramid
- D. Triangular Pyramid



- A. Triangular Pyramid
- B. Rectangular Pyramid
- C. Triangular Prism
- D. Cone

1. _____

2. _____

3. _____

4. _____

5. _____

6. _____

7. _____

8. _____

9. _____

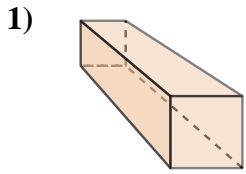
10. _____

11. _____

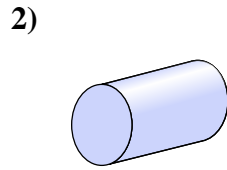
12. _____



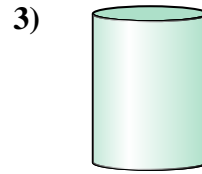
Determine which choice BEST describes the shape shown.



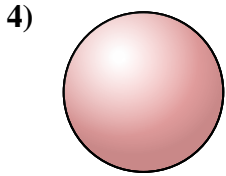
- A. Cone
- B. Rectangular Prism
- C. Rectangular Pyramid
- D. Cylinder



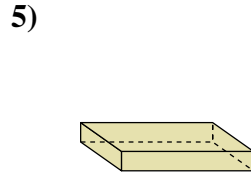
- A. Rectangular Prism
- B. Triangular Pyramid
- C. Cylinder
- D. Triangular Prism



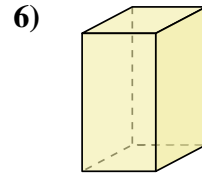
- A. Cube
- B. Cylinder
- C. Rectangular Pyramid
- D. Rectangular Prism



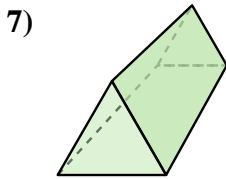
- A. Cylinder
- B. Rectangular Pyramid
- C. Triangular Prism
- D. Sphere



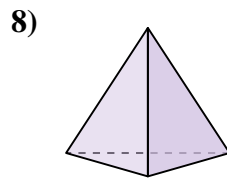
- A. Triangular Prism
- B. Triangular Pyramid
- C. Rectangular Prism
- D. Sphere



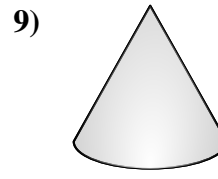
- A. Cone
- B. Triangular Prism
- C. Rectangular Prism
- D. Cylinder



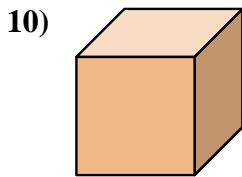
- A. Cone
- B. Sphere
- C. Cube
- D. Triangular Prism



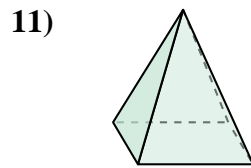
- A. Cylinder
- B. Rectangular Prism
- C. Triangular Pyramid
- D. Cone



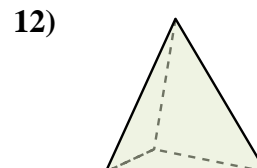
- A. Triangular Prism
- B. Rectangular Prism
- C. Cone
- D. Cube



- A. Cube
- B. Sphere
- C. Triangular Pyramid
- D. Rectangular Prism



- A. Cone
- B. Triangular Prism
- C. Rectangular Pyramid
- D. Triangular Pyramid



- A. Triangular Pyramid
- B. Rectangular Pyramid
- C. Triangular Prism
- D. Cone

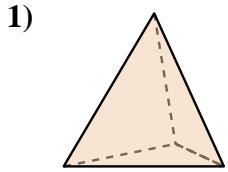
Answers

- 1. **B**
- 2. **C**
- 3. **B**
- 4. **D**
- 5. **C**
- 6. **C**
- 7. **D**
- 8. **C**
- 9. **C**
- 10. **A**
- 11. **C**
- 12. **A**

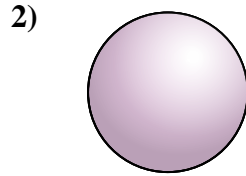


Determine which choice BEST describes the shape shown.

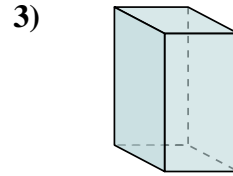
Answers



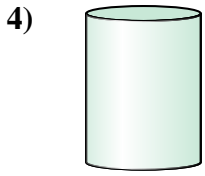
- A. Triangular Pyramid
- B. Triangular Prism
- C. Sphere
- D. Rectangular Prism



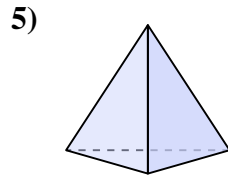
- A. Sphere
- B. Rectangular Pyramid
- C. Rectangular Prism
- D. Cone



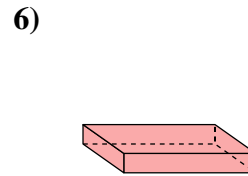
- A. Cube
- B. Rectangular Prism
- C. Cylinder
- D. Triangular Prism



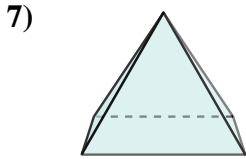
- A. Rectangular Prism
- B. Rectangular Pyramid
- C. Sphere
- D. Cylinder



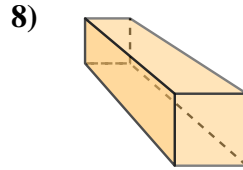
- A. Cube
- B. Rectangular Pyramid
- C. Triangular Prism
- D. Triangular Pyramid



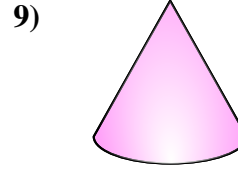
- A. Rectangular Prism
- B. Triangular Pyramid
- C. Cone
- D. Cube



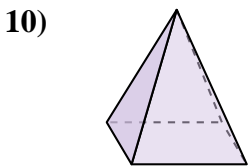
- A. Cone
- B. Cylinder
- C. Rectangular Pyramid
- D. Cube



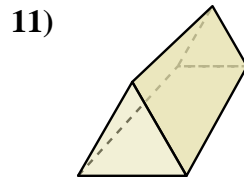
- A. Cylinder
- B. Rectangular Prism
- C. Triangular Prism
- D. Cone



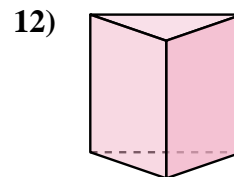
- A. Sphere
- B. Triangular Prism
- C. Cube
- D. Cone



- A. Sphere
- B. Cube
- C. Cylinder
- D. Rectangular Pyramid



- A. Triangular Pyramid
- B. Cone
- C. Triangular Prism
- D. Cube



- A. Cylinder
- B. Cone
- C. Rectangular Pyramid
- D. Triangular Prism

1. _____

2. _____

3. _____

4. _____

5. _____

6. _____

7. _____

8. _____

9. _____

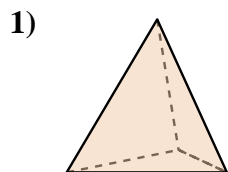
10. _____

11. _____

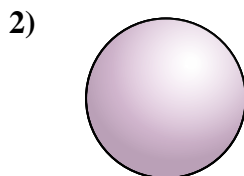
12. _____



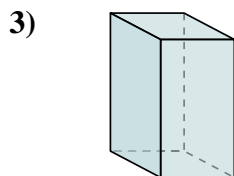
Determine which choice BEST describes the shape shown.



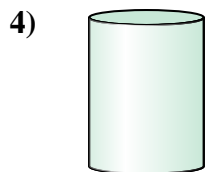
- A. Triangular Pyramid
- B. Triangular Prism
- C. Sphere
- D. Rectangular Prism



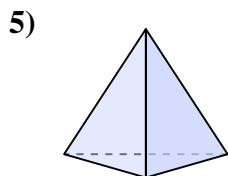
- A. Sphere
- B. Rectangular Pyramid
- C. Rectangular Prism
- D. Cone



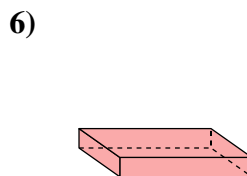
- A. Cube
- B. Rectangular Prism
- C. Cylinder
- D. Triangular Prism



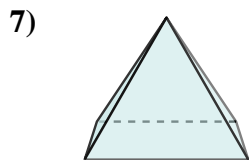
- A. Rectangular Prism
- B. Rectangular Pyramid
- C. Sphere
- D. Cylinder



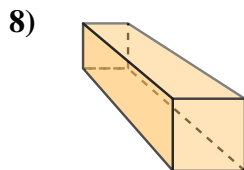
- A. Cube
- B. Rectangular Pyramid
- C. Triangular Prism
- D. Triangular Pyramid



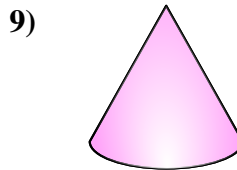
- A. Rectangular Prism
- B. Triangular Pyramid
- C. Cone
- D. Cube



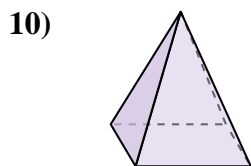
- A. Cone
- B. Cylinder
- C. Rectangular Pyramid
- D. Cube



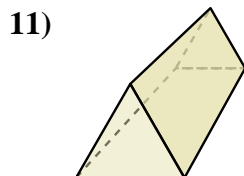
- A. Cylinder
- B. Rectangular Prism
- C. Triangular Prism
- D. Cone



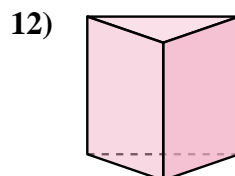
- A. Sphere
- B. Triangular Prism
- C. Cube
- D. Cone



- A. Sphere
- B. Cube
- C. Cylinder
- D. Rectangular Pyramid



- A. Triangular Pyramid
- B. Cone
- C. Triangular Prism
- D. Cube



- A. Cylinder
- B. Cone
- C. Rectangular Pyramid
- D. Triangular Prism

Answers

1. **A**

2. **A**

3. **B**

4. **D**

5. **D**

6. **A**

7. **C**

8. **B**

9. **D**

10. **D**

11. **C**

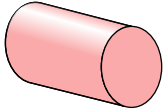
12. **D**



Determine which choice BEST describes the shape shown.

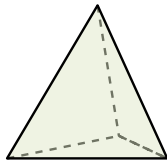
Answers

1)



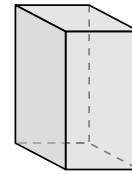
- A. Cone
- B. Sphere
- C. Cylinder
- D. Rectangular Pyramid

2)



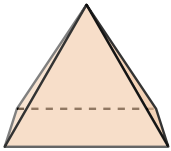
- A. Triangular Pyramid
- B. Rectangular Prism
- C. Cone
- D. Rectangular Pyramid

3)




- A. Cone
- B. Cube
- C. Rectangular Prism
- D. Sphere

4)



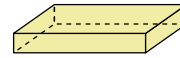
- A. Cone
- B. Cylinder
- C. Rectangular Pyramid
- D. Rectangular Prism

5)



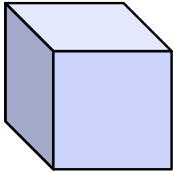
- A. Cylinder
- B. Rectangular Prism
- C. Sphere
- D. Cube

6)



- A. Rectangular Pyramid
- B. Sphere
- C. Rectangular Prism
- D. Cylinder

7)



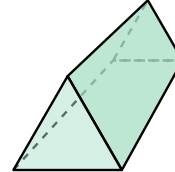
- A. Triangular Prism
- B. Cone
- C. Cube
- D. Cylinder

8)



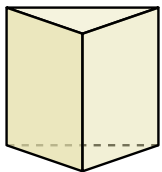
- A. Sphere
- B. Cube
- C. Cone
- D. Cylinder

9)



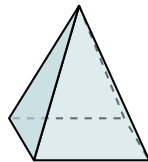
- A. Cube
- B. Sphere
- C. Triangular Pyramid
- D. Triangular Prism

10)



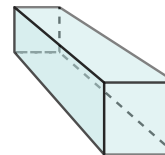
- A. Sphere
- B. Rectangular Prism
- C. Triangular Prism
- D. Rectangular Pyramid

11)



- A. Cylinder
- B. Triangular Prism
- C. Rectangular Pyramid
- D. Cube

12)



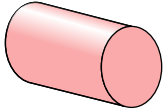
- A. Cone
- B. Cylinder
- C. Sphere
- D. Rectangular Prism

1. _____
2. _____
3. _____
4. _____
5. _____
6. _____
7. _____
8. _____
9. _____
10. _____
11. _____
12. _____



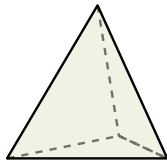
Determine which choice BEST describes the shape shown.

1)



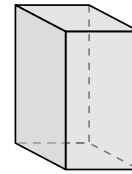
- A. Cone
- B. Sphere
- C. Cylinder
- D. Rectangular Pyramid

2)



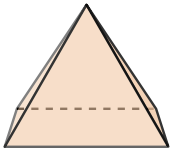
- A. Triangular Pyramid
- B. Rectangular Prism
- C. Cone
- D. Rectangular Pyramid

3)




- A. Cone
- B. Cube
- C. Rectangular Prism
- D. Sphere

4)



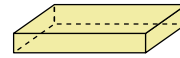
- A. Cone
- B. Cylinder
- C. Rectangular Pyramid
- D. Rectangular Prism

5)



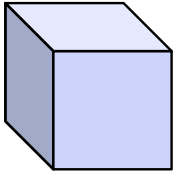
- A. Cylinder
- B. Rectangular Prism
- C. Sphere
- D. Cube

6)



- A. Rectangular Pyramid
- B. Sphere
- C. Rectangular Prism
- D. Cylinder

7)



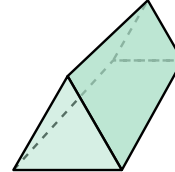
- A. Triangular Prism
- B. Cone
- C. Cube
- D. Cylinder

8)



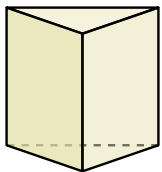
- A. Sphere
- B. Cube
- C. Cone
- D. Cylinder

9)



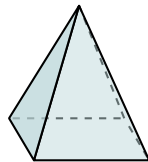
- A. Cube
- B. Sphere
- C. Triangular Pyramid
- D. Triangular Prism

10)



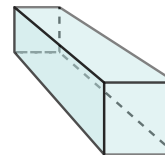
- A. Sphere
- B. Rectangular Prism
- C. Triangular Prism
- D. Rectangular Pyramid

11)



- A. Cylinder
- B. Triangular Prism
- C. Rectangular Pyramid
- D. Cube

12)



- A. Cone
- B. Cylinder
- C. Sphere
- D. Rectangular Prism

Answers

1. C

2. A

3. C

4. C

5. C

6. C

7. C

8. D

9. D

10. C

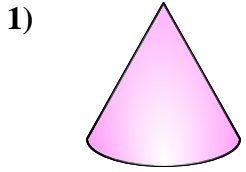
11. C

12. D

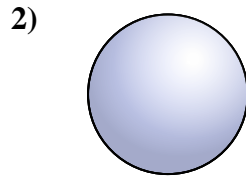


Determine which choice BEST describes the shape shown.

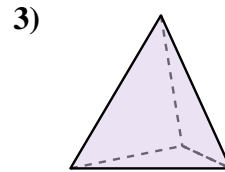
Answers



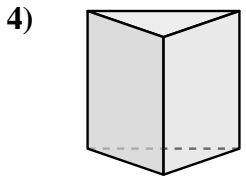
- A. Rectangular Pyramid
- B. Cylinder
- C. Sphere
- D. Cone



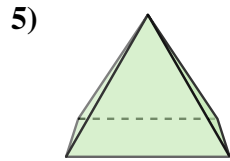
- A. Cube
- B. Triangular Prism
- C. Sphere
- D. Cone



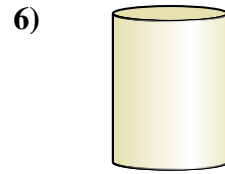
- A. Triangular Pyramid
- B. Triangular Prism
- C. Cylinder
- D. Cone



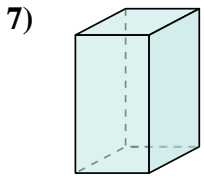
- A. Cylinder
- B. Cube
- C. Rectangular Pyramid
- D. Triangular Prism



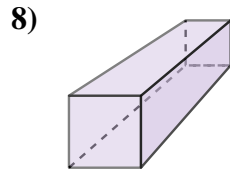
- A. Rectangular Pyramid
- B. Cube
- C. Rectangular Prism
- D. Triangular Pyramid



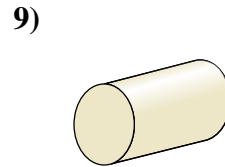
- A. Rectangular Prism
- B. Triangular Prism
- C. Rectangular Pyramid
- D. Cylinder



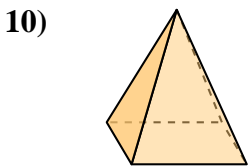
- A. Cylinder
- B. Rectangular Prism
- C. Cube
- D. Cone



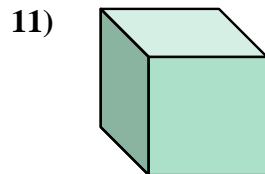
- A. Sphere
- B. Cylinder
- C. Rectangular Prism
- D. Cone



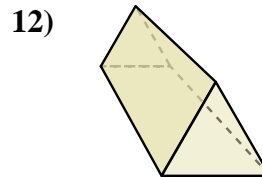
- A. Cylinder
- B. Triangular Prism
- C. Triangular Pyramid
- D. Rectangular Pyramid



- A. Cylinder
- B. Sphere
- C. Rectangular Pyramid
- D. Rectangular Prism



- A. Sphere
- B. Cube
- C. Cylinder
- D. Triangular Prism

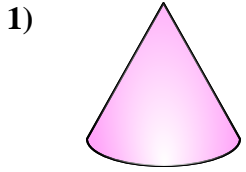


- A. Rectangular Pyramid
- B. Cube
- C. Rectangular Prism
- D. Triangular Prism

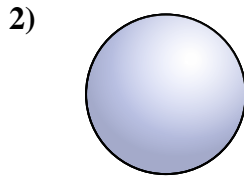
- 1. _____
- 2. _____
- 3. _____
- 4. _____
- 5. _____
- 6. _____
- 7. _____
- 8. _____
- 9. _____
- 10. _____
- 11. _____
- 12. _____



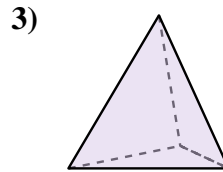
Determine which choice BEST describes the shape shown.



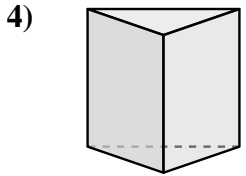
- 1) A. Rectangular Pyramid
- B. Cylinder
- C. Sphere
- D. Cone



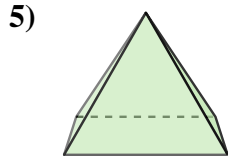
- 2) A. Cube
- B. Triangular Prism
- C. Sphere
- D. Cone



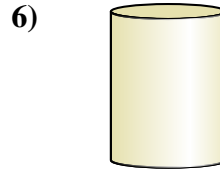
- 3) A. Triangular Pyramid
- B. Triangular Prism
- C. Cylinder
- D. Cone



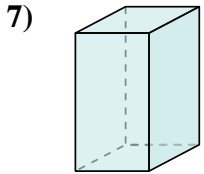
- 4) A. Cylinder
- B. Cube
- C. Rectangular Pyramid
- D. Triangular Prism



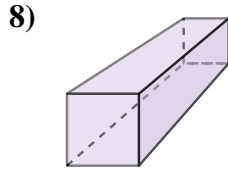
- 5) A. Rectangular Pyramid
- B. Cube
- C. Rectangular Prism
- D. Triangular Pyramid



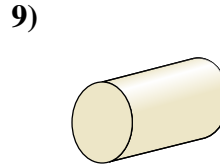
- 6) A. Rectangular Prism
- B. Triangular Prism
- C. Rectangular Pyramid
- D. Cylinder



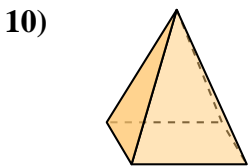
- 7) A. Cylinder
- B. Rectangular Prism
- C. Cube
- D. Cone



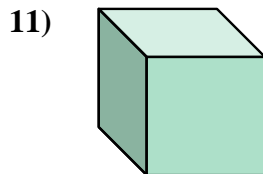
- 8) A. Sphere
- B. Cylinder
- C. Rectangular Prism
- D. Cone



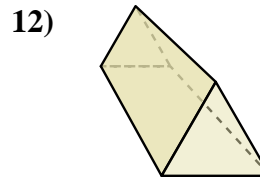
- 9) A. Cylinder
- B. Triangular Prism
- C. Triangular Pyramid
- D. Rectangular Pyramid



- 10) A. Cylinder
- B. Sphere
- C. Rectangular Pyramid
- D. Rectangular Prism



- 11) A. Sphere
- B. Cube
- C. Cylinder
- D. Triangular Prism



- 12) A. Rectangular Pyramid
- B. Cube
- C. Rectangular Prism
- D. Triangular Prism

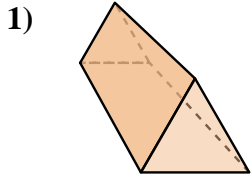
Answers

- 1. **D**
- 2. **C**
- 3. **A**
- 4. **D**
- 5. **A**
- 6. **D**
- 7. **B**
- 8. **C**
- 9. **A**
- 10. **C**
- 11. **B**
- 12. **D**

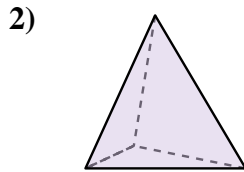


Determine which choice BEST describes the shape shown.

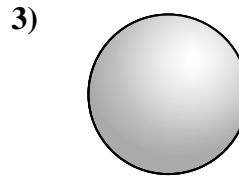
Answers



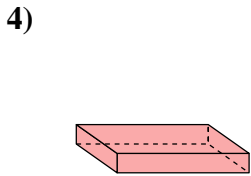
- 1) A. Cube
- B. Cone
- C. Sphere
- D. Triangular Prism



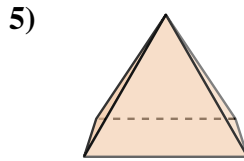
- 2) A. Cylinder
- B. Triangular Prism
- C. Rectangular Pyramid
- D. Triangular Pyramid



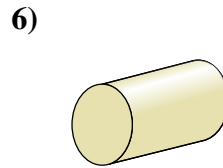
- 3) A. Cone
- B. Triangular Pyramid
- C. Sphere
- D. Rectangular Pyramid



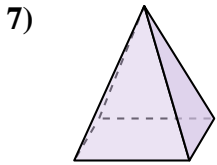
- 4) A. Triangular Pyramid
- B. Cylinder
- C. Rectangular Pyramid
- D. Rectangular Prism



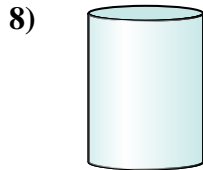
- 5) A. Rectangular Pyramid
- B. Cylinder
- C. Cube
- D. Triangular Pyramid



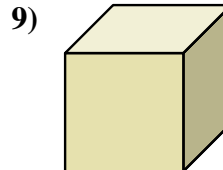
- 6) A. Rectangular Pyramid
- B. Cylinder
- C. Rectangular Prism
- D. Triangular Prism



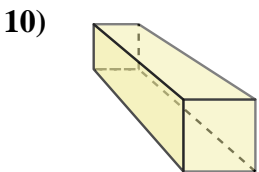
- 7) A. Rectangular Pyramid
- B. Sphere
- C. Rectangular Prism
- D. Cone



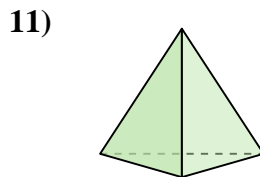
- 8) A. Cube
- B. Rectangular Pyramid
- C. Triangular Prism
- D. Cylinder



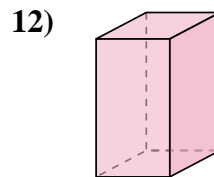
- 9) A. Sphere
- B. Cube
- C. Cylinder
- D. Cone



- 10) A. Rectangular Prism
- B. Cube
- C. Rectangular Pyramid
- D. Triangular Pyramid



- 11) A. Cone
- B. Rectangular Pyramid
- C. Triangular Pyramid
- D. Rectangular Prism



- 12) A. Cone
- B. Rectangular Prism
- C. Triangular Pyramid
- D. Triangular Prism

1. _____

2. _____

3. _____

4. _____

5. _____

6. _____

7. _____

8. _____

9. _____

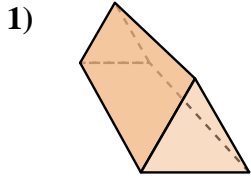
10. _____

11. _____

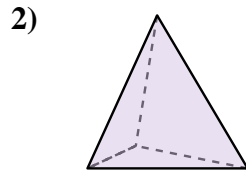
12. _____



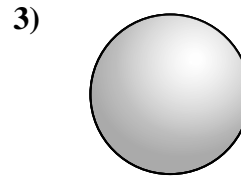
Determine which choice BEST describes the shape shown.



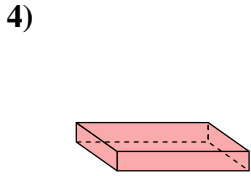
- A. Cube
- B. Cone
- C. Sphere
- D. Triangular Prism



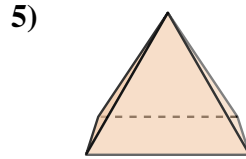
- A. Cylinder
- B. Triangular Prism
- C. Rectangular Pyramid
- D. Triangular Pyramid



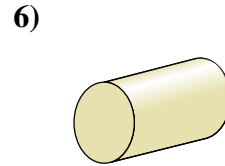
- A. Cone
- B. Triangular Pyramid
- C. Sphere
- D. Rectangular Pyramid



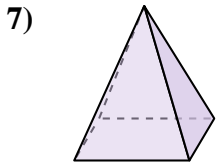
- A. Triangular Pyramid
- B. Cylinder
- C. Rectangular Pyramid
- D. Rectangular Prism



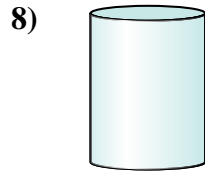
- A. Rectangular Pyramid
- B. Cylinder
- C. Cube
- D. Triangular Pyramid



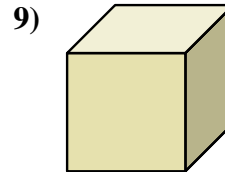
- A. Rectangular Pyramid
- B. Cylinder
- C. Rectangular Prism
- D. Triangular Prism



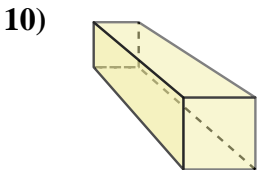
- A. Rectangular Pyramid
- B. Sphere
- C. Rectangular Prism
- D. Cone



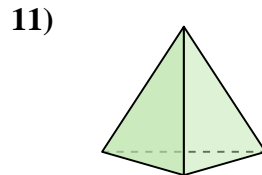
- A. Cube
- B. Rectangular Pyramid
- C. Triangular Prism
- D. Cylinder



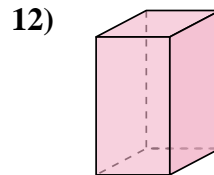
- A. Sphere
- B. Cube
- C. Cylinder
- D. Cone



- A. Rectangular Prism
- B. Cube
- C. Rectangular Pyramid
- D. Triangular Pyramid



- A. Cone
- B. Rectangular Pyramid
- C. Triangular Pyramid
- D. Rectangular Prism



- A. Cone
- B. Rectangular Prism
- C. Triangular Pyramid
- D. Triangular Prism

Answers

1. D

2. D

3. C

4. D

5. A

6. B

7. A

8. D

9. B

10. A

11. C

12. B